

Thakur Educational Trust's (Regd.)  
**THAKUR VIDYA MANDIR HIGH SCHOOL & JUNIOR COLLEGE**

I Terminal Examination 2015-16

Subject : Mathematics

NAME \_\_\_\_\_ Std: II DIV. \_\_\_\_\_ Roll NO.: \_\_\_\_\_

DATE - 28 / 09 / 2015

MARKS: 60

Timing : 2 hrs 45 mins

**Q I A] Fill in the blanks :**

**(8)**

1. A box has \_\_\_\_\_ edges and \_\_\_\_\_ corners.
2. Today is Monday , yesterday was \_\_\_\_\_.
3. The number 8 is \_\_\_\_\_ more than 4.
4.  $19 - 0 =$  \_\_\_\_\_
5. Chaitra, \_\_\_\_\_ Jyeshth.
6. In the word 'NUMBER' M is in the \_\_\_\_\_ position.
7. Thursday, \_\_\_\_\_ Saturday.

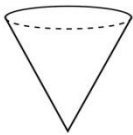
**B] Match the following :**

**(6)**

**Column A**

**Column B**

1.




a) sphere

2.




b) rectangle

3.



c) 23

4.



d) cylindrical

5.

e) cone

6.

f) vertical line

Ans : 1 \_\_\_\_\_ 2. \_\_\_\_\_ 3. \_\_\_\_\_ 4. \_\_\_\_\_ 5. \_\_\_\_\_ 6. \_\_\_\_\_

**QII A ] Write in words:**

**(5)**

a) 49 - \_\_\_\_\_

b) 123 - \_\_\_\_\_

c) 276 - \_\_\_\_\_

d) 313 - \_\_\_\_\_

e) 220 - \_\_\_\_\_

**B] Write in numerals :**

**(5)**

1. sixty four - \_\_\_\_\_

2. Three hundred - \_\_\_\_\_

3. Two hundred and forty six - \_\_\_\_\_

4. one hundred and two - \_\_\_\_\_

5. Three hundred and twelve - \_\_\_\_\_

**C] Fill in the boxes :**

**(6)**

a)  $5 \times 6 = \square$

b)  $2 \times \square = 18$

c)  $\square \times 3 = 12$

d)  $6 \times 7 = \square$

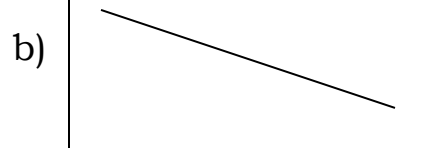
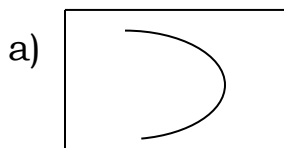
e)  $\square \times 8 = 24$

f)  $4 \times \square = 40$

**QIII A] Do as directed :**

**(14)**


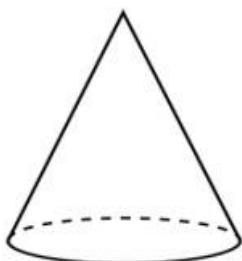
1) Identify the given lines :



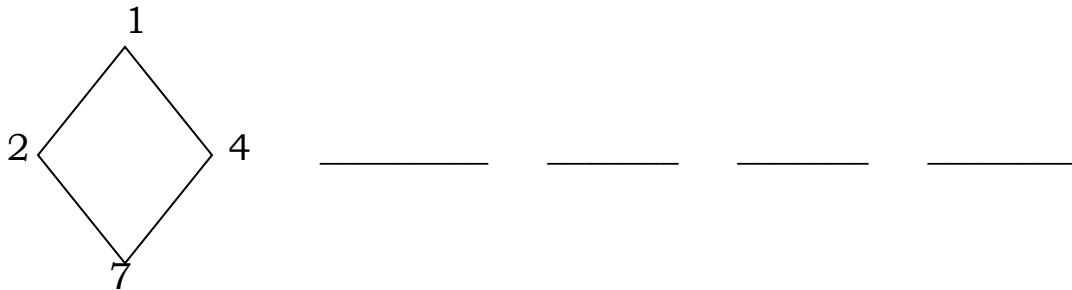
\_\_\_\_\_

\_\_\_\_\_

2) Colour the flat surface of the object :



3) Take any two numbers at a time from those around the diamond and make four numbers :



4) Fill in the boxes:

Cardinal number	Ordinal number	Ordinal number names
a)	5 <sup>th</sup>	<input type="text"/>
b) 9	<input type="text"/>	<input type="text"/>
c)		Seventh

5) Count the objects, write the addition fact and the corresponding subtraction facts :



6) Write the given number in tens – units form:

Number	Tens	Units
25	_____	_____
7	_____	_____

**B] Add the following :**

**(4)**

T U	T U	U	T U
1 5	1 7	7	6 5
+ 4	+ 1 2	+ 9	+ 3 3
_____	_____	_____	_____
_____	_____	_____	_____

**C] Subtract the following :**

**(4)**

T U	T U	T U	T U
1 7	2 7	1 3	7 4
- 9	- 1 4	- 1 3	- 5 2
_____	_____	_____	_____
_____	_____	_____	_____

**QIV A] Word problems**

**(8)**

1) Ram had 44 chairs in his shop. He sold 22 chairs to Shyam. How many chairs are left with Ram ?

Tens	Units
□	

---

---

---

Ans : \_\_\_\_\_

2) Pradeep made 20 flowerpots, Seeta made 14 flowerpots. How many flowerpots are there altogether ?

Tens	Units
□	

---

---

---

Ans : \_\_\_\_\_

**All the best**

**THAKUR VIDYA MANDIR HIGH SCHOOL & JUNIOR COLLEGE**

**I Terminal Examination 2015-16**

**Subject : English**

Name : \_\_\_\_\_ Std: II Div : \_\_\_\_\_ Roll No. \_\_\_\_\_

**MARKS: 60**

**DATE - 24/09/2015**

**Time : 2 hrs 45 mins**

**QIA] Choose the correct answer from the bracket and fill in the blanks:(4)**

[ curl, paw, park, storm]

1. Ashwin had gone to the \_\_\_\_\_ with his mother.
2. Cats, dogs and foxes \_\_\_\_\_ up to go to sleep.
3. When the fish came, there was \_\_\_\_\_ in the sea.
4. The lion woke up and caught the mouse in his \_\_\_\_\_.

**B] Match the column :**

**(4)**

A

B

- |              |                            |
|--------------|----------------------------|
| 1. permanent | a) as much as is necessary |
| 2. snap      | b) lasting for long time   |
| 3. enough    | c) saw or noticed          |
| 4. spotted   | d) to break                |

1. \_\_\_\_\_ 2. \_\_\_\_\_ 3. \_\_\_\_\_ 4. \_\_\_\_\_

**C] State whether the following statements are true or false:**

**(4)**

1. We should brush our teeth once in a day. \_\_\_\_\_
2. After a few days the mouse was caught in a net . \_\_\_\_\_
3. Simple Simon met a postman. \_\_\_\_\_
4. A leaf fell on Foxy – Loxy. \_\_\_\_\_

**QII. A] Complete the following lines :**

**(2)**

1. Our teeth help us to bite, \_\_\_\_\_  
\_\_\_\_\_

**B] Who said to whom :**

**(2)**

1. " Thank you, little friend ".  
\_\_\_\_\_

2. " My wife wants to be a Queen ".  
\_\_\_\_\_

**C] Frame sentences :**

**(2)**

1. friend – \_\_\_\_\_  
\_\_\_\_\_

2. Scared – \_\_\_\_\_  
\_\_\_\_\_

**D] Complete the lines of the poem :**

**(2)**

Mix a pancake,

\_\_\_\_\_ ,

Pop it in the pan;

Fry a pancake,

\_\_\_\_\_ ,

Catch it if you can.

**QIII. A] Do as directed :**

**(10)**

1. Find the smaller word in

mother - \_\_\_\_\_

2. Write the rhyming word for the following :

sow - \_\_\_\_\_

3. Give opposite for the following:

tall x \_\_\_\_\_

4. Give one word for :

One who writes - \_\_\_\_\_

5. Write the plural of 'game' - \_\_\_\_\_

6. Write in alphabetical order:

T	P	S	U	=				
---	---	---	---	---	--	--	--	--

7. Add ' ed ' to the word 'pop' - \_\_\_\_\_

8. The female name of 'drake' is - \_\_\_\_\_

9. Write the word correctly :

beter - \_\_\_\_\_

**B] Answer the following questions:**

**(10)**

1. Where did Malhar live ?

Ans: \_\_\_\_\_

\_\_\_\_\_

2. What happens if the baby teeth or milk teeth falls off ?

Ans: \_\_\_\_\_

\_\_\_\_\_

3. What happens when people don't get enough sleep ?

Ans: \_\_\_\_\_

\_\_\_\_\_

4. Why did Mr. Cross write a letter to the Mayor ?

Ans: \_\_\_\_\_  
\_\_\_\_\_

5. Why Ashwin wanted to become a mango tree ?

Ans: \_\_\_\_\_  
\_\_\_\_\_

### Grammar

#### QI. Do as directed :

(17)

1. Write in alphabetical order :

Chalk, paper, scale, pencil

---

2. Cross the proper Noun :

Mary had a little lamb.

3. Circle the Common Noun:

Neha reads a book every day.

4. Write the correct vowel :



( \_\_\_ c e - cre \_\_\_ m )

5. Write the consonant :

tap      \_\_\_ ap      \_\_\_ ap

6. The plural of ' watch' is \_\_\_\_\_

7. The masculine of 'grand mother' is \_\_\_\_\_

8. Rewrite the sentence using capital letters, full stop or question marks where necessary.

rohan, anita and i like to build sand castles

---

9. Fill in the blanks:

a) \_\_\_\_\_ tiger roars inside the cage. ( An, The)

b) \_\_\_\_\_ apple a day keeps the doctor away. ( An, A)


10. I am made of wax

I give you light

The longer I stand

The shorter I grow

WHO AM I ? \_\_\_\_\_



11. Young one of lion and lioness is \_\_\_\_\_.

12. Tick the correct punctuation :

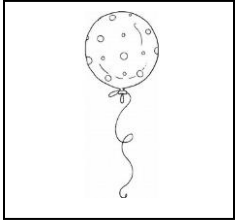
a) Do you like to climb the rock ( • / ? )

b) Aliya loves to dance ( • / ? )

13. I look smart in my uniform and cap


I fly aeroplanes. I am a \_\_\_\_\_.

14. Name the picture :




\_\_\_\_\_

15. Make a new word by adding one letter :



+ nail = \_\_\_\_\_



**QII. Write the composition on any one of the following :**

**(3)**

Our National Flag or The Farmer.

---

---

---

---

---

---

---

---

---

---

---

---

---

---

---

---

---

---

---

---

---

---

---

---

**All the best**